





Name _____

Date: _____

Using Known Facts

	<p>Write the multiplication expression for the array.</p> <p>_____ × _____</p> <p>Draw a horizontal or vertical line through the array.</p> <p>Write the two new expressions for the array.</p> <p>_____ × _____</p> <p>_____ × _____</p>
	<p>Write the multiplication expression for the array.</p> <p>_____ × _____</p> <p>Draw a horizontal or vertical line through the array.</p> <p>Write the two new expressions for the array.</p> <p>_____ × _____</p> <p>_____ × _____</p>
	<p>Write the multiplication expression for the array.</p> <p>_____ × _____</p> <p>Draw a horizontal or vertical line through the array.</p> <p>Write the two new expressions for the array.</p> <p>_____ × _____</p> <p>_____ × _____</p>



Write the multiplication expression for the array.


_____ × _____

Draw a horizontal or vertical line through the array.

Write the two new expressions for the array.

_____ × _____

_____ × _____



Write the multiplication expression for the array.


_____ × _____

Draw a horizontal or vertical line through the array.

Write the two new expressions for the array.

_____ × _____

_____ × _____



Write the multiplication expression for the array.

_____ × _____

Draw a horizontal or vertical line through the array.

Write the two new expressions for the array.

_____ × _____

_____ × _____

